









Harvest Morning Task 2 (MA)

FRACTIONS

Look at the chart below and answer the questions.

1. What fraction are the apples?

2. What fraction are the carrots?

3. What fraction is the banana?









4. What fraction are vegetables?

5. What fraction are fruits?

Harvest Morning Task 2 (MA)

FRACTIONS

Look at the chart below and answer the questions.

1. What fraction are the apples?

2. What fraction are the carrots?

3. What fraction is the banana?

4. What fraction are vegetables?

5. What fraction are fruits?
